

Sample Exam 2

Multiple Choice (4 points each): Answer on blue form; be sure to code in your name and ID.

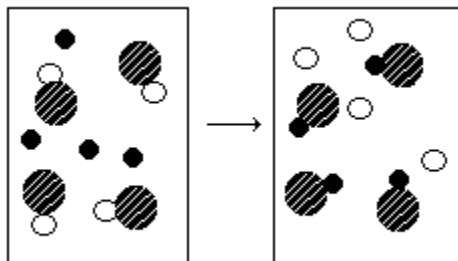
Answers

1. The reaction,  $C_6H_{12}O_6 \rightarrow 6C + 6H_2O$ , is labelled a
- a. rearrangement reaction
  - b. direct synthesis reaction
  - c. single-displacement reaction
  - d. decomposition reaction
  - e. double-displacement reaction

1. d

2. Consider the following diagram of a chemical reaction

2. c



reactants

products

This type of reaction is labelled a

- a. direct synthesis reaction
- b. double-displacement reaction
- c. single-displacement reaction
- d. decomposition reaction
- e. hydrolysis reaction

3. Predict the products if a reaction occurs when  $Mg(s)$  and  $NiCl_2(aq)$  are mixed.
- a.  $MgCl(aq)$  and  $NiCl(aq)$
  - b.  $Ni(s)$  and  $Cl_2(g)$
  - c.  $Mg(s)$  and  $Ni(s)$
  - d.  $MgNi_2(aq)$  and  $Ni(s)$
  - e.  $MgCl_2(aq)$  and  $Ni(s)$

3. e

4. Many metal carbonates decompose upon heating to produce
- a. the pure metal
  - b. the metal bicarbonate
  - c. the metal and carbonic acid
  - d. the metal oxide and carbon dioxide gas
  - e. carbon monoxide gas

4. d

5. Consider the uncompleted equation:  $Fe(s) + H_2SO_4(aq) \rightarrow$

5. e

The completed equation includes the products

- a.  $Fe^{2+}(aq) + H_2O(l) + SO_3(g)$
- b.  $FeO_2(aq) + H_2S(aq)$
- c.  $FeSO_4(aq) + H_2SO_3(aq)$
- d.  $FeS(aq) + H_2O(l) + O_2(g)$
- e.  $FeSO_4(aq) + H_2(g)$

6. An aqueous waste stream contains the toxic metal  $Cr^{3+}$ . Which substance, when added to the water, will precipitate the chromium?

6. a

- a.  $NaOH$
- b.  $NaNO_3$
- c.  $HNO_3$
- d.  $NaCl$
- e.  $NaCH_3CO_2$

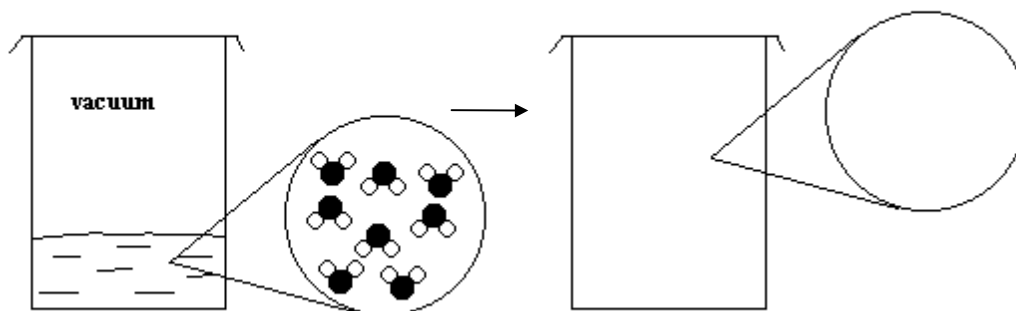
Sample Exam 2

7. How many moles of  $\text{Ca(OH)}_2$  are required to neutralize 250 mL of 2.00 M  $\text{HNO}_3(\text{aq})$ ? 7. d
- $$\text{Ca(OH)}_2(\text{s}) + 2\text{HNO}_3(\text{aq}) \rightarrow \text{Ca(NO}_3)_2(\text{aq}) + 6\text{H}_2\text{O}(\text{l})$$
- a. 0.500                      b. 2.00  
c. 1.00                        d. 0.250  
e. 0.125
8. The oxidation numbers of many elements are variable. The compounds  $\text{HCl}$ ,  $\text{ClF}$ ,  $\text{ClF}_3$ ,  $\text{ClF}_5$ , and  $\text{ClF}_7$  clearly show chlorine with a variety of oxidation numbers. What respective oxidation numbers does chlorine have in these compounds? 8. c
- a. +1, +3, +5, +7, +9                      b. 0, +1, +2, +3, +4  
c. -1, +1, +3, +5, +7                      d. -1, +2, +4, +6, +8  
e. 0, +1, +3, +5, +7
9. When a charcoal briquette is combusted and the resulting energy is used to cook hot dogs, what form of energy is used? 9. c
- a. solar    b. radiant  
c. thermal                                      d. mechanical  
e. nuclear
10. A chemical reaction that absorbs heat from the surroundings is said to be \_\_\_\_\_ and has a \_\_\_\_\_ value of  $\Delta H$ . 10. a
- a. endothermic, positive                      b. endothermic, negative  
c. exothermic, positive                      d. exothermic, negative  
e. isothermic, zero
11. A 1000 g sample of lead shot, at  $300^\circ\text{C}$ , is dropped into 100 g of water at a temperature of  $5.6^\circ\text{C}$ . The specific heat of lead is 0.129 and of water  $4.184 \text{ J/g}\cdot^\circ\text{C}$ . What is the final temperature of the mixture, in  $^\circ\text{C}$ ? 11. d
- a. 100    b. 65  
c. 40    d. 75  
e. 50
12. When water evaporates at constant pressure, the sign of the enthalpy change for the process 12. b
- a. is negative                                      b. is positive  
c. cannot be determined                      d. depends on the container volume  
e. depends on the temperature
13. Select the one equation shown below for which the enthalpy change is the heat of formation. 13. a
- a.  $\text{H}_2(\text{g}) + \text{O}_2(\text{g}) \rightarrow \text{H}_2\text{O}_2(\text{l})$                       b.  $\text{C}_2\text{H}_4(\text{g}) + \text{H}_2(\text{g}) \rightarrow \text{C}_2\text{H}_6(\text{g})$   
c.  $\text{H}_2(\text{g}) + \text{Br}_2(\text{l}) \rightarrow 2\text{HBr}(\text{g})$                       d.  $\text{O}_2(\text{g}) + 2\text{F}_2(\text{g}) \rightarrow 2\text{OF}_2(\text{g})$   
e.  $2\text{CO}(\text{g}) + \text{O}_2(\text{g}) \rightarrow 2\text{CO}_2(\text{g})$

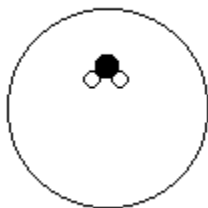
Sample Exam 2

14. A sample of water is vaporized in a closed container as shown:

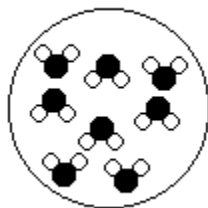
14. a



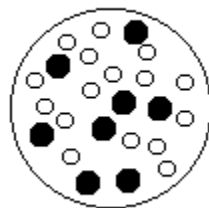
Which of the following diagrams best represents what you would “see” in the magnified view of the vapor?



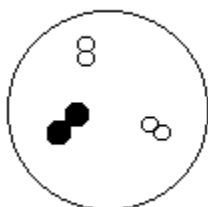
a.



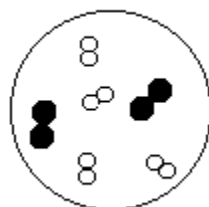
b.



c.

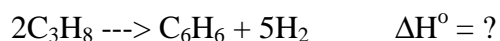


d.



e.

15. Calculate the  $\Delta H^\circ$  for the reaction:



$\Delta H^\circ$  of formation for  $\text{C}_3\text{H}_8$  and  $\text{C}_6\text{H}_6$  is  $-104$  and  $490$  kJ/mol, respectively.

15. e

a. 386

b. -386

c. 282

d. -282

e. 698

16. Consider the reaction,  $\text{CaCO}_3(\text{s}) \rightarrow \text{CaO}(\text{s}) + \text{CO}_2(\text{g})$   $\Delta H^\circ = 178.0$  kJ  
How much heat would be required to decompose exactly 2 mol  $\text{CaCO}_3(\text{s})$ ?

16. b

a. 1780 kJ

b. 356 kJ

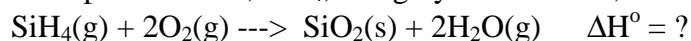
c. 178 kJ

d. 89.0 kJ

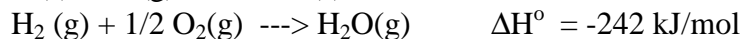
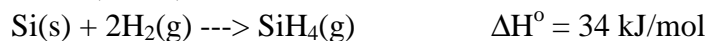
e. 44.5 kJ

Sample Exam 2

17. The compound silane,  $\text{SiH}_4$ , is highly combustible, as described by the equation: 17. d



Calculate  $\Delta H^\circ$ , in kJ, for the reaction.



- a. 1365    b. -1365  
c. -1143                                         d. -1429  
e. -733

18. A student makes the following measurements in lab: 18. b

1. Mass of metal sample
2. Initial temperature of metal
3. Final temperature of metal and  $\text{H}_2\text{O}$

The heat capacity of water is given.

What additional information is needed to calculate the specific heat of the metal?

- i. Mass of the water
- ii. Initial temperature of  $\text{H}_2\text{O}$
- iii. Atmospheric pressure
- iv. Room temperature

- a. i, ii, iii, and iv are all needed  
b. i and ii only  
c. i, ii, and iii only  
d. i, ii, and iv only  
e. ii and iii only

19. 50 grams of copper pellets at  $100^\circ\text{C}$  is added to an insulated cup containing 50 grams of water at  $20^\circ\text{C}$ . The final temperature when thermal equilibrium is reached is close to  $40^\circ\text{C}$ . 19. e

The primary reason for the resulting temperature is:

- a. Most of the heat is lost to the surroundings.
- b. The mass of water is equal to the mass of copper.
- c. Water has a lower heat capacity than copper.
- d. Water and copper have similar heat capacities.
- e. Water has a higher heat capacity than copper.

20. The net ionic equation that describes the reaction of silver nitrate with sodium chloride in water is 20. a

- a.  $\text{Ag}^+ + \text{Cl}^- \rightarrow \text{AgCl}$
- b.  $\text{Na}^+ + \text{NO}_3^- \rightarrow \text{NaNO}_3$
- c.  $\text{AgNO}_3 + \text{NaCl} \rightarrow \text{AgCl} + \text{NaNO}_3$
- d.  $\text{Ag}^+ + \text{Cl}^- + \text{Na}^+ + \text{NO}_3^- \rightarrow \text{AgCl} + \text{Na}^+ + \text{NO}_3^-$
- e.  $\text{AgCl} + \text{NaNO}_3 \rightarrow \text{AgNO}_3 + \text{NaCl}$